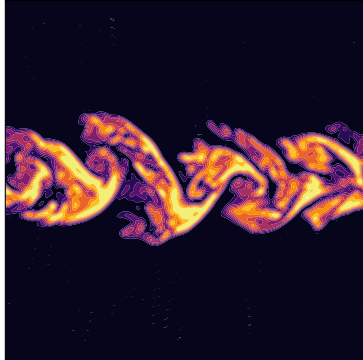
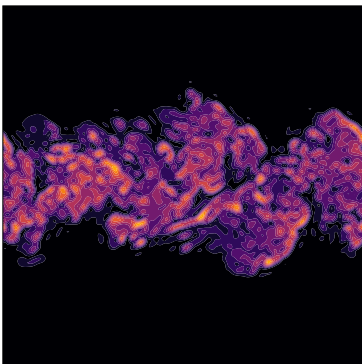


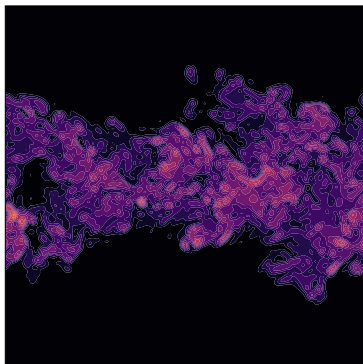
(a)  $t = 0.7T_\Omega$



(b)  $t = 0.9T_\Omega$



(c)  $t = T_\Omega$



(d)  $t = 1.2T_\Omega$