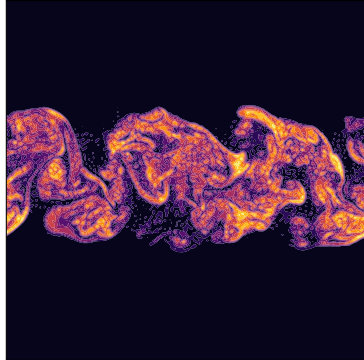
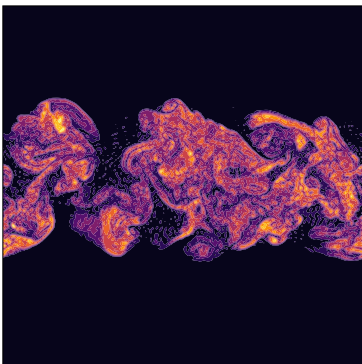


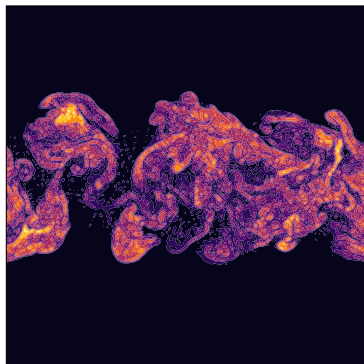
(a) $t = 0.75T_\Omega$



(b) $t = 0.9T_\Omega$



(c) $t = T_\Omega$



(d) $t = 1.05T_\Omega$